



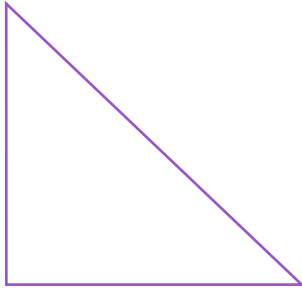
NAME _____

DATE _____

OPEN AND CLOSED SHAPES

Is this shape open or closed?

1)



Open

Closed


4)



Open

Closed

2)



Open

Closed


5)



Open

Closed


3)



Open

Closed

6)



Open

Closed